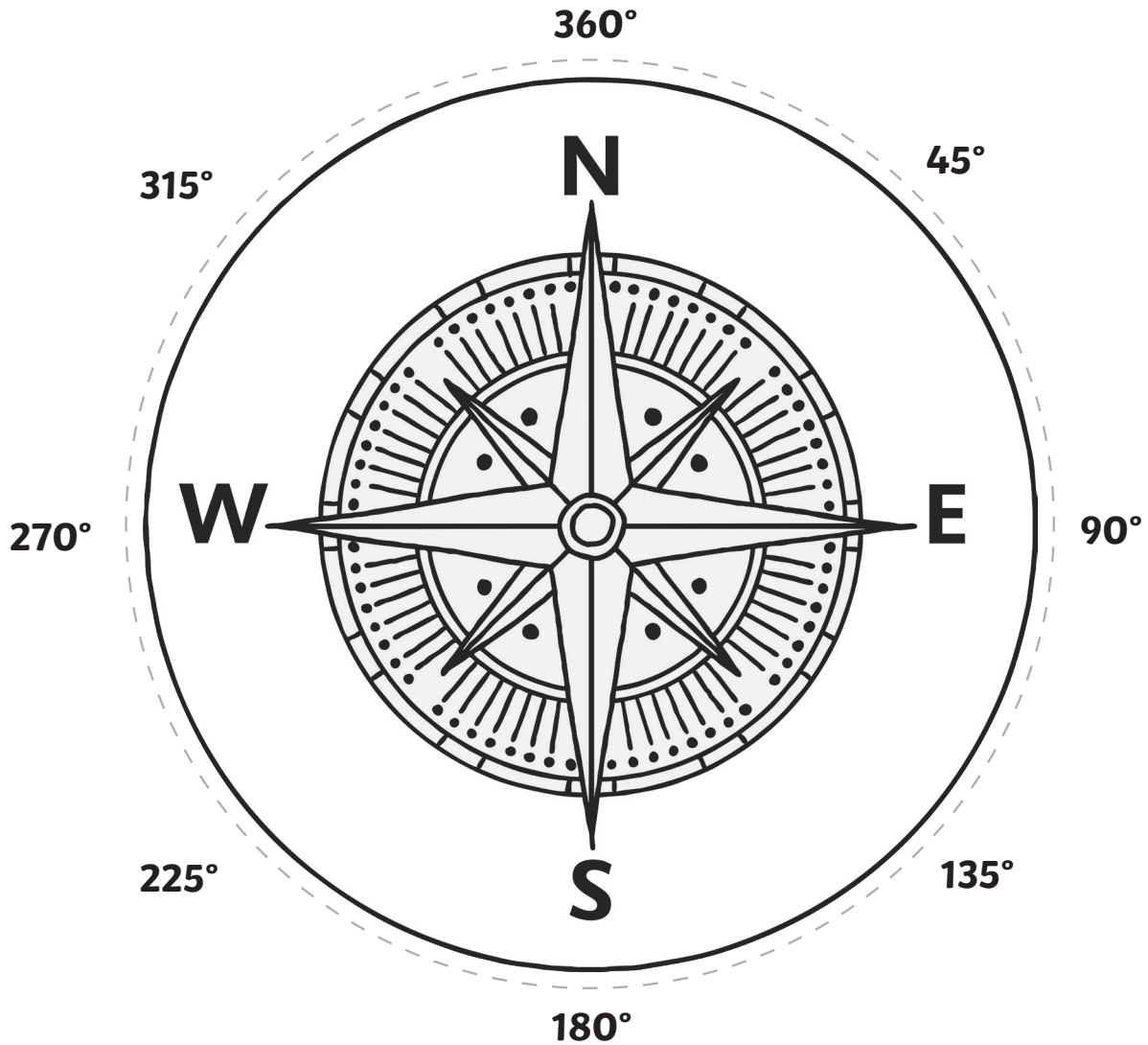


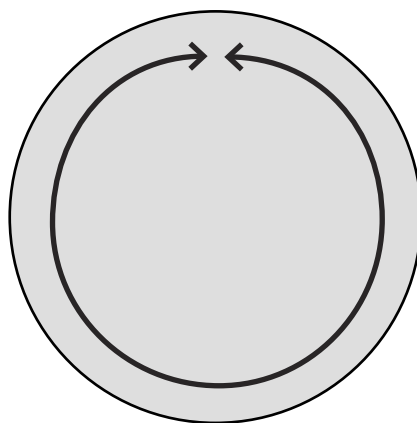
Degrees of Turn Four Compass Points Activity

- Cut out both circles
- Fix the circles together by pushing a split-pin through the centre
- Use your compass to answer the questions

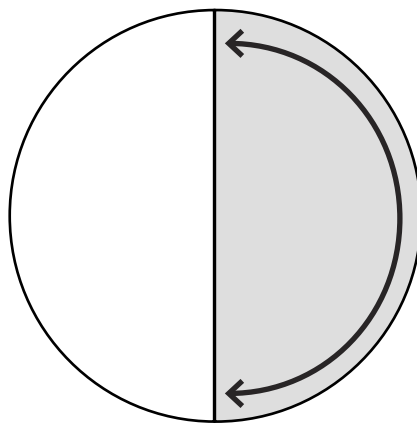


Match up the degrees of turn with the correct angle:

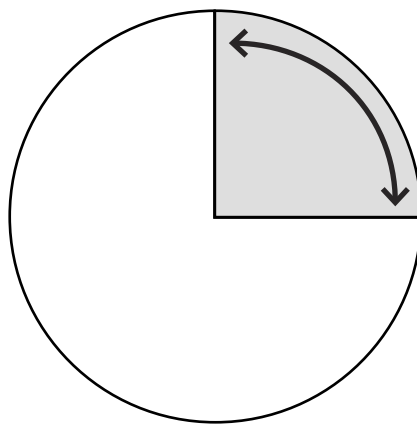
90°



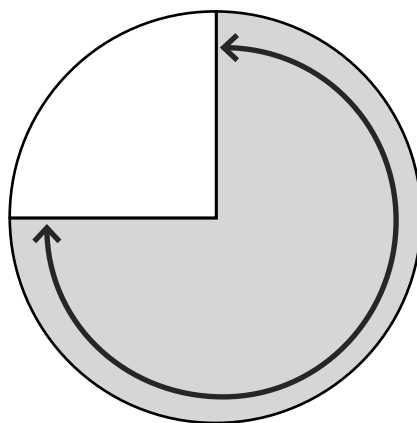
180°



270°



360°



Use your compass to help you answer the questions below. Always turn **clockwise**.

1. Start facing north. How many degrees will you turn to face south?

2. Start facing south. How many degrees will you turn to face west?

3. Start facing east. How many degrees will you turn to face west?

4. Start facing west. How many degrees will you turn to face south?

5. Start facing north. Turn clockwise 90° . Which direction are you facing?

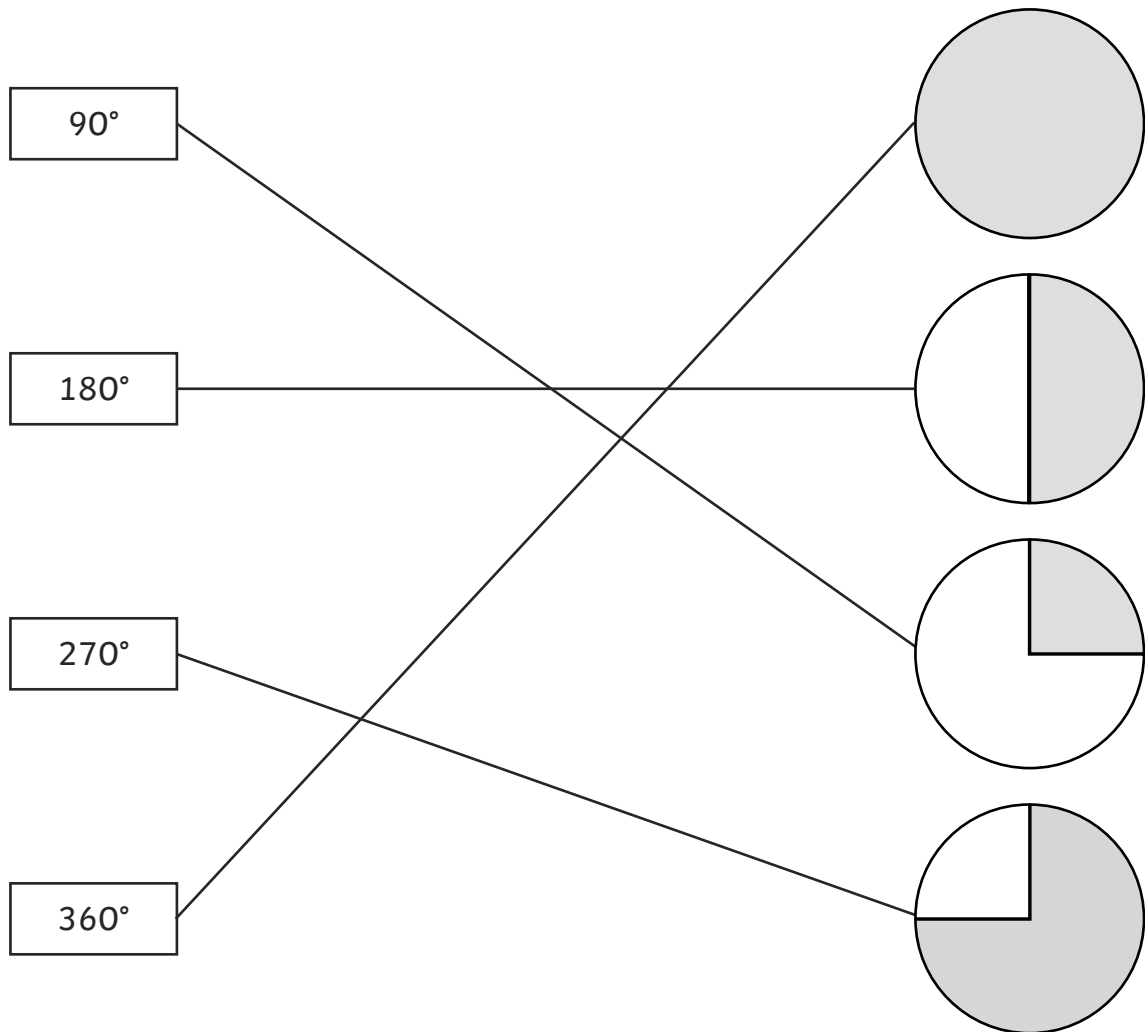
6. Start facing south. Turn clockwise 180° . Which direction are you facing?

7. Start facing west. Turn clockwise 270° . Which direction are you facing?

8. Start facing east. Turn clockwise 360° . Which direction are you facing?

Degrees of Turn Four Compass Points

Activity Answers



1. Start facing north. How many degrees will you turn to face south? **180°**
2. Start facing south. How many degrees will you turn to face west? **90°**
3. Start facing east. How many degrees will you turn to face west? **180°**
4. Start facing west. How many degrees will you turn to face south? **270°**
5. Start facing north. Turn clockwise 90°. Which direction are you facing? **East**
6. Start facing south. Turn clockwise 180°. Which direction are you facing? **North**
7. Start facing west. Turn clockwise 270°. Which direction are you facing? **South**
8. Start facing east. Turn clockwise 360°. Which direction are you facing? **East**