

Year 1 - Oasis Academy Fir Vale

Maths Activity- Mat 1

Section 1

Put the numbers in order, starting with the lowest.

5 7 4

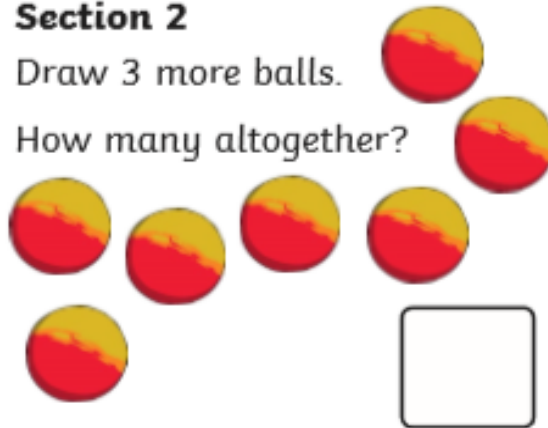
--	--	--



Section 2

Draw 3 more balls.

How many altogether?



Section 3

$$5 - 2 = \square$$

$$6 - 4 = \square$$

Section 4

Imogen has 7 sweets and eats 4 of them. How many sweets are left?



Section 5

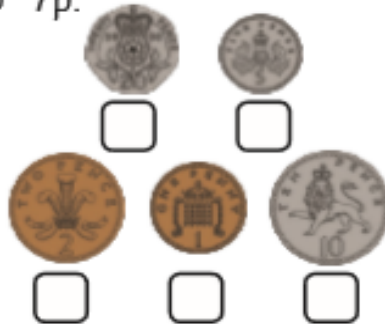
Group the cookies in twos.

How many groups are there?



Section 6

Tick the coins which add to 7p.



Section 7

Draw 5 spots onto the ladybird.



Section 8

Fill in the missing number.

4, 5, 6, , 8, 9



Year 1 - Oasis Academy Fir Vale

Maths Activity- Mat 2

Section 1

Which number is 5 more than 7? Tick the answer.

12 **14** **10**



Section 2

Draw 4 more snowflakes.

How many do you have altogether?



Section 3

$7 + 4 = \square$

$9 - 6 = \square$

$4 + 8 = \square$

Section 4

Aliyan spends 6 £1 coins.


How much does he have left?



Section 5

Group the butterflies in twos.

How many groups are there?



Section 6

Circle the even numbers.


14 5

11

18 8

Section 7

Draw 11 spots onto the leopard, putting at least 2 on his head.



Section 8

What is the missing number?

20, 30, 40, ?, 60, 70.



Year 1 - Oasis Academy fir Vale

Maths Activity- Mat 3

Section 1

Put these numbers in order, starting with the highest.

14 12 21 4 11 18



Section 2

How long is the snake?



Section 3

$12 + 5 = \square$

$12 - 6 = \square$

$12 + 8 = \square$

Section 4

Layla has £8 and is given £5 more.

How much does she have now?



Section 5

Share the biscuits evenly into 2 boxes. How many are in each box?



Section 6

If $13 = 10 + 3$, what is 19?

Section 7

How many sweets can I buy for 16p?



Section 8

What number is next?

80, 70, 60,



Year 1 - Oasis Academy Fir Vale

Maths Activity- Mat 4

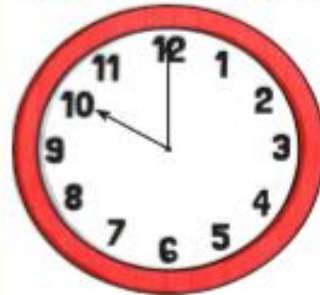
Section 1

What number is 8 less than 15?




Section 2

What time is on the clock?



Section 3

Add the coins.



Section 4

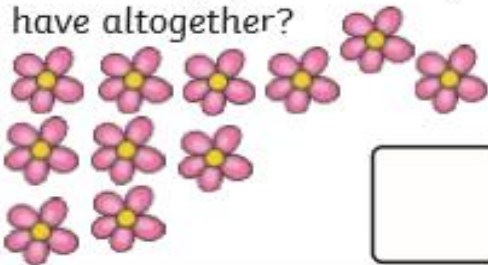
What is the underlined digit worth?

24

Section 5

Draw 4 more flowers.

How many flowers do you have altogether?




Section 6

If $17 = 10 + 7$, what is 27?

Section 7

Tick the smallest bear.



Section 8

$$12 + \square = 19$$



Year 1 - Oasis Academy Fir Vale

Maths Activity- Mat 5

Section 1

How many apples are there altogether?



Section 2

Toby has 7 candles. He needs 13.

How many more does he need?



Section 3

Which shape has four sides, all the same length?

Section 5

What will the time be in 5 hours?

06.00

Section 6

What is double 9?

Section 7

Make the highest number you can with these digits.

2 3 6

Section 8

What time is on the clock?



Section 4

How tall is the giraffe?



Year 1 - Oasis Academy Fir Vale


Maths Activity- Mat 6

Section 1

What is half of 20?

Section 2

How many fish are there altogether?



Section 3

What day is two days after Tuesday?

Section 4

What time will it be in 1 hour?



Section 5

How much of the square is shaded?



Section 6


$12 + 4 =$

$11 - 7 =$

$4 \times 10 =$

Section 7

Tick the coins that add up to 18p.



Section 8

Share the ducks equally between 2 ponds. How many ducks are in 1 pond?

